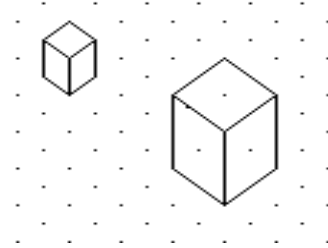


3D Drawing

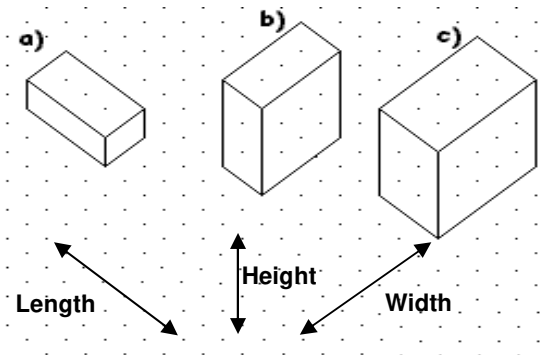
Task A Cube

- 1) Copy the two adjacent cubes shown on the right.
- 2) Draw a cube that has a length, width and height of 3.
- 3) Draw a cube that has a length, width and height of 4



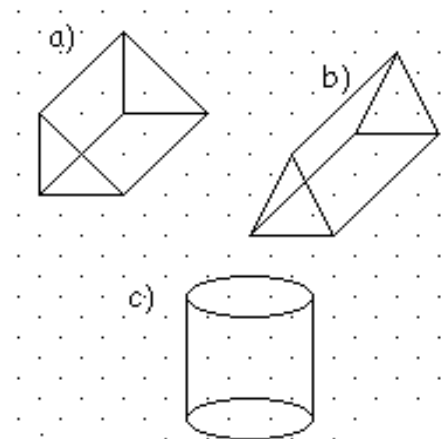
Task B Cuboids

- 1) Copy the 3 cuboids on the right. Next to each one, write down its length, width and height.
- 2) Draw a cuboid with length 2, width 3 and height 4.
- 3) Draw a cuboid with length 5, width 3 and height 2.
- 4) Draw a cuboid with length 2, width 6 and height 2.



Task C Prisms

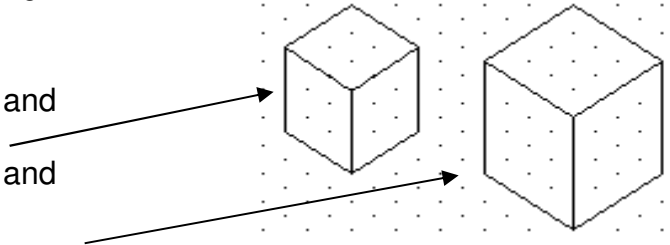
- 1) Copy out the prisms on the right.
- 2) What special name is given to prism c)?



3D Drawing Answers

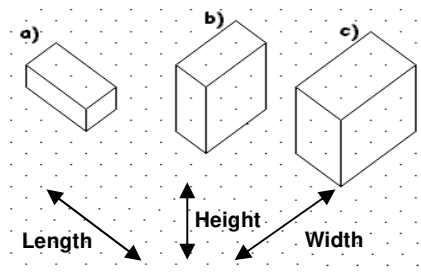
Task A Cube

- 1) Copy the two adjacent cubes shown on the right.
- 2) Draw a cube that has a length, width and height of 3.
- 3) Draw a cube that has a length, width and height of 4

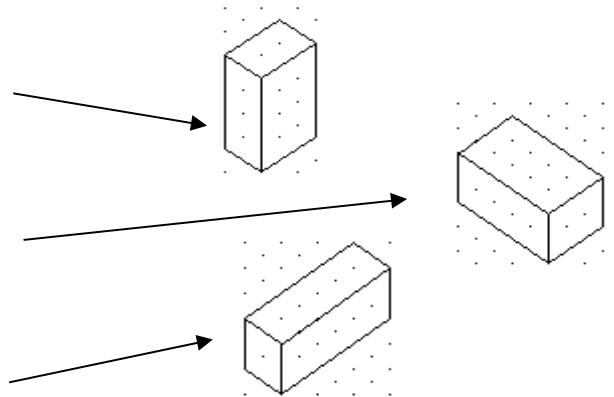


Task B Cuboids

- 1) Copy the 3 cuboids on the right. Next to each one, write down its length, width and height.
 - a. $L=4, W=2, H=1$
 - b. $L=2, W=4, H=3$
 - c. $L=3, W=5, H=3$

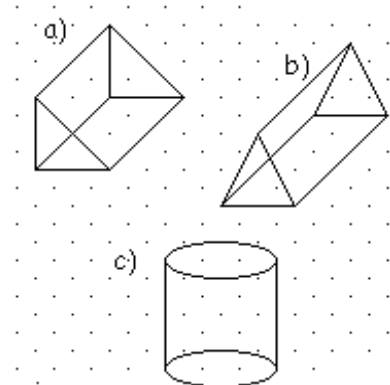


- 2) Draw a cuboid with length 2, width 3 and height 4.
- 3) Draw a cuboid with length 5, width 3 and height 2.
- 4) Draw a cuboid with length 2, width 6 and height 2.



Task C Prisms

- 1) Copy out the prisms on the right.
- 2) What special name is given to prism c?



Cylinder